

NEET UG-2023
[PAPER WITH ANSWER KEY]

HELD ON SUNDAY 07TH MAY 2023

CHEMISTRY

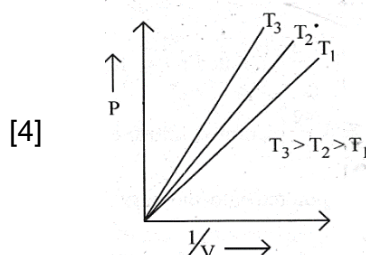
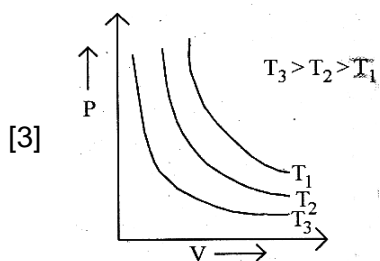
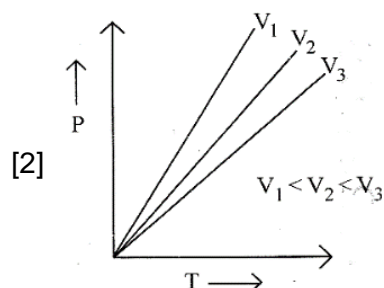
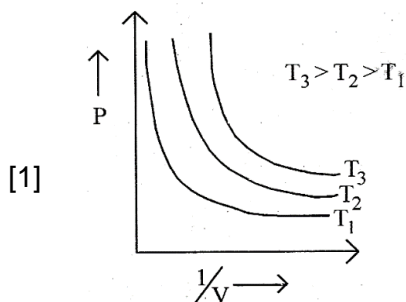
SECTION-A

[Q.51] Amongst the given options which of the following molecules/ion acts as a Lewis acid ?

- [1] BF_3
- [2] OH^-
- [3] NH_3
- [4] H_2O

[ANS] 1

[Q.52] Which amongst the following options is **correct** graphical representation of Boyle's Law ?

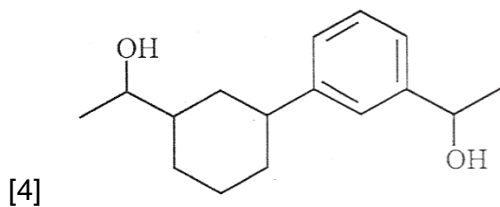
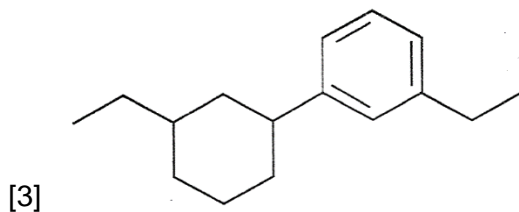
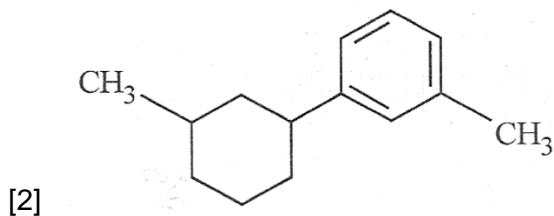
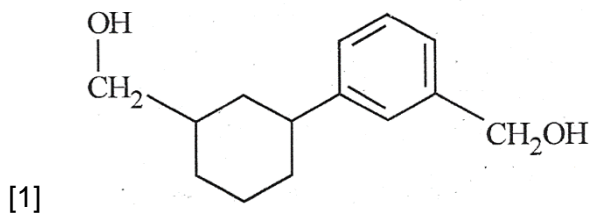
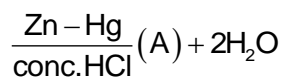
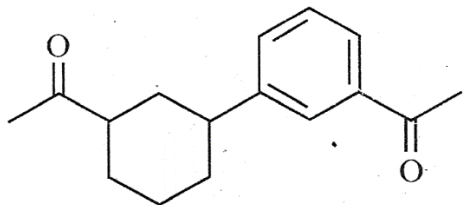


[ANS] 4

For detailed Solutions, visit our YouTube channel

<https://www.youtube.com/live/ExqVyzgRBtM?feature=share>

[Q.53] Identify product (A) in the following reaction :



[ANS] 3

For detailed Solutions, visit our YouTube channel

<https://www.youtube.com/live/ExqVyzgRBtM?feature=share>

- [Q.54] Which of the following statements are NOT correct?
- A. Hydrogen is used to reduce heavy metal oxides to metals.
 - B. Heavy water is used to study reaction mechanism.
 - C. Hydrogen is used to make saturated fats from oils.
 - D. The H-H bond dissociation enthalpy is lowest as compared to a single bond between two atoms of any element.
 - E. Hydrogen reduces oxides of metals that are more active than iron.

Choose the most appropriate answer from the options given below :

- [1] D, E only
- [2] A, B, C only
- [3] B, C, D, E only
- [4] B, D only

[ANS] 1

- [Q.55] Given below are two statements : one is labelled as **Assertion A** and the other is labelled as **Reason R**.

Assertion A : In equation $\Delta_r G = -nFE_{\text{cell}}$, value of $\Delta_r G$ depends on n .

Reasons R : E_{cell} is an intensive property and $\Delta_r G$ is an extensive property.

In the light of the above statements, choose the **correct** answer from the options given below :

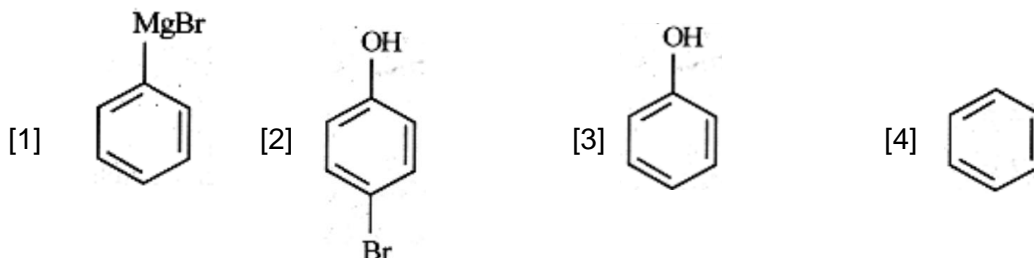
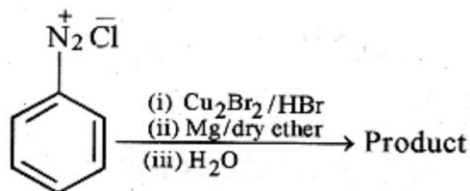
- [1] **A** is true but **R** is false.
- [2] **A** is false but **R** is true.
- [3] Both **A** and **R** are true and **R** is the correct explanation of **A**.
- [4] Both **A** and **R** are true and **R** is **NOT** the correct explanation of **A**.

[ANS] 3

For detailed Solutions, visit our YouTube channel

<https://www.youtube.com/live/ExqVyzgRBtM?feature=share>

[Q.56] Identify the product in the following reaction :



[ANS] 4

[Q.57] Given below are two statements: one is labelled as Assertion A and the other is labelled as Reason R:

Assertion A: Helium is used to dilute oxygen in diving apparatus.

Reason R: Helium has high solubility in O_2 .

In the light of the above statements, choose the correct answer from the options given below:

- [1] A is true but R is false
 [2] A is false but R is true.
 [3] Both A and R are true and R is the correct explanation of A.
 [4] Both A and R are true and R is NOT the correct explanation of A.

[ANS] 1

[Q.58] Given below are two statements : one is labeled as Assertion A and the other is labeled as Reason R:

Assertion A: A reaction can have zero activation energy.

Reason R: The minimum extra amount of energy absorbed by reactant molecules so that their energy becomes equal to threshold value, is called activation energy.

In the light of the above statements, choose the correct answer from the options given below:

- [1] A is true but R is false
 [2] A is false but R is true
 [3] Both A and R are true and R is the correct explanation of A
 [4] Both A and R are true and R is NOT the correct explanation of A.

[ANS] 4

For detailed Solutions, visit our YouTube channel

<https://www.youtube.com/live/ExqVyzgRBtM?feature=share>

[Q.59] Weight (g) of two moles of the organic compound, which is obtained by heating sodium ethanoate with sodium hydroxide in presence of calcium oxide is:

- [1] 30
 [2] 18
 [3] 16
 [4] 32

[ANS] 4

[Q.60] Amongst the following, the total number of species NOT having eight electrons around central atom in its outer most shell, is

$\text{NH}_3, \text{AlCl}_3, \text{BeCl}_2, \text{CCl}_4, \text{PCl}_5$:

- [1] 4
 [2] 1
 [3] 3
 [4] 2

[ANS] 3

[Q.61] The relation between n_m , (n_m = the number of permissible values of magnetic quantum number (m)) for a given value of azimuthal quantum number (l), is

- [1] $n_m = 2l^2 + 1$
 [2] $n_m = l + 2$
 [3] $l = \frac{n_m - 1}{2}$
 [4] $l = 2n_m + 1$

[ANS] 3

[Q.62] Which of the following reactions will NOT give primary amine as the product ?

- [1] $\text{CH}_3\text{NC} \xrightarrow[\text{(ii) H}_3\text{O}^\oplus]{\text{(i) LiAlH}_4} \text{Product}$
 [2] $\text{CH}_3\text{CONH}_2 \xrightarrow[\text{(ii) H}_3\text{O}^\oplus]{\text{(i) LiAlH}_4} \text{Product}$
 [3] $\text{CH}_3\text{CONH}_2 \xrightarrow{\text{Br}_2/\text{KOH}} \text{Product}$
 [4] $\text{CH}_3\text{CN} \xrightarrow[\text{(ii) H}_3\text{O}^\oplus]{\text{(i) LiAlH}_4} \text{Product}$

[ANS] 1

For detailed Solutions, visit our YouTube channel

<https://www.youtube.com/live/ExqVyzgRBtM?feature=share>

[Q.63] Homoleptic complex from the following complexes is :

- [1] Pentaamminecarbonatocobalt (III) chloride
- [2] Triamminetriaquachromium (III) chloride
- [3] Potassium trioxalatoaluminate (III)
- [4] Diamminechloridonitrito-N-platinum (II)

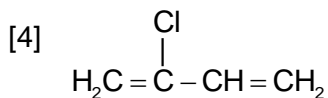
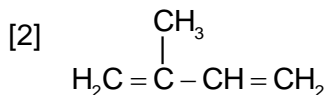
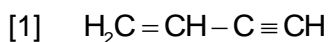
[ANS] 3

[Q.64] Some tranquilizers are listed below. Which one from the following belongs to barbiturates?

- [1] Valium
- [2] Veronal
- [3] Chlordiazepoxide
- [4] Meprobamate

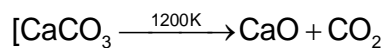
[ANS] 2

[Q.65] Which amongst the following molecules on polymerization produces neoprene ?



[ANS] 4

[Q.66] The right option for the mass of CO_2 produced by heating 20 g of 20% pure limestone is (Atomic mass of Ca = 40)



- [1] 2.64 g
- [2] 1.32 g
- [3] 1.12 g
- [4] 1.76 g

[ANS] 4

For detailed Solutions, visit our YouTube channel

<https://www.youtube.com/live/ExqVyzgRBtM?feature=share>

[Q.67] Which one of the following statements is **correct**?

- [1] The bone in human body is an inert and unchanging substance.
- [2] Mg plays roles in neuromuscular function and interneuronal transmission.
- [3] The daily requirement of Mg and Ca in the human body is estimated to be 0.2 – 0.3 g.
- [4] All enzymes that utilize ATP in phosphate transfer require Ca as the cofactor.

[ANS] 3

[Q.68] Match List – I with List -II :

- | List – I | List – II |
|--------------|---------------------------------------|
| A. Coke | I. Carbon atoms are sp^3 hybridised |
| B. Diamond | II. Used as a dry lubricant |
| C. Fullerene | III. Used as a reducing agent |
| D. Graphite | IV. Cage like molecules |

Choose the correct answer from the options given below :

- [1] A-III, B-I, C-IV, D-II
- [2] A-III, B-IV, C-I, D-II
- [3] A-II, B-IV, C-I, D-III
- [4] A-IV, B-I, C-II, D-III

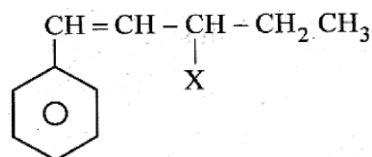
[ANS] 1

[Q.69] The stability of Cu^{2+} is more than Cu^+ salts in aqueous solution due to -

- [1] hydration energy
- [2] second ionization enthalpy
- [3] first ionization enthalpy
- [4] enthalpy of atomization

[ANS] 1

[Q.70] The given compound



is an example of _____ .

- [1] allylic halide
- [2] vinylic halide
- [3] benzylic halide
- [4] aryl halide

[ANS] 1

For detailed Solutions, visit our YouTube channel

<https://www.youtube.com/live/ExqVyzgRBtM?feature=share>

[Q.71] Given below are two statements:

Statement I: A unit formed by the attachment of a base to 1' position of sugar is known as nucleoside.

Statement II: When nucleoside is linked to phosphorous acid at 5'-position of sugar moiety, we get nucleotide.

In the light of the above statements, choose the correct answer from the options given below:

- [1] Statement I is true but Statement II is false.
- [2] Statement I is false but Statement II is true.
- [3] Both Statement I and Statement II are true.
- [4] Both Statement I and Statement II are false.

[ANS] 1

[Q.72] In Lassaigne's extract of an organic compound, both nitrogen and sulphur are present, which gives blood red colour with Fe^{3+} due to the formation of

- [1] $[\text{Fe}(\text{CN})_5\text{NOS}]^{4-}$
- [2] $[\text{Fe}(\text{SCN})]^{2+}$
- [3] $\text{Fe}_4[\text{Fe}(\text{CN})_6]_3 \times \text{H}_2\text{O}$
- [4] NaSCN

[ANS] 2

[Q.73] The number of σ bonds, π bonds and lone pair of electrons in pyridine, respectively are:

- [1] 11, 3, 1
- [2] 12, 2, 1
- [3] 11, 2, 0
- [4] 12, 3, 0

[ANS] 1

For detailed Solutions, visit our YouTube channel

<https://www.youtube.com/live/ExqVyzgRBtM?feature=share>

[Q.74] A compound is formed by two elements A and B. The element B forms cubic close packed structure and atoms of A occupy $1/3$ of tetrahedral voids. If the formula of the compound is A_xB_y , then the value of $x + y$ is in option

- [1] 3
- [2] 2
- [3] 5
- [4] 4

[ANS] 3

[Q.75] The correct order of energies of molecular orbitals of N_2 molecule, is :

- [1] $\sigma 1s < \sigma^* 1s < \sigma 2s < \sigma^* 2s < \sigma 2p_z < \sigma^* 2p_z < (\pi 2p_x = \pi 2p_y) < (\pi^* 2p_x = \pi^* 2p_y)$
- [2] $\sigma 1s < \sigma^* 1s < \sigma 2s < \sigma^* 2s < (\pi 2p_x = \pi 2p_y) < (\pi^* 2p_x = \pi^* 2p_y) < \sigma 2p_z < \sigma^* 2p_z$
- [3] $\sigma 1s < \sigma^* 1s < \sigma 2s < \sigma^* 2s < (\pi 2p_x = \pi 2p_y) < \sigma 2p_z < (\pi^* 2p_x = \pi^* 2p_y) < \sigma^* 2p_z$
- [4] $\sigma 1s < \sigma^* 1s < \sigma 2s < \sigma^* 2s < \sigma 2p_z < (\pi 2p_x = \pi 2p_y) < (\pi^* 2p_x = \pi^* 2p_y) < \sigma^* 2p_z$

[ANS] 3

[Q.76] Given below are two statements : one is labelled as **Assertion A** and the other is labelled as **Reason R** :

Assertion A : Metallic sodium dissolves in liquid ammonia giving a deep blue solution, which is paramagnetic.

Reasons R : The deep blue solution is due to the formation of amide.

In the light of the above statements, choose the correct answer from the options given below :

- [1] A is true but R is false.
- [2] A is false but R is true.
- [3] Both A and R are true and R is the correct explanation of A.
- [4] Both A and R are true but R is NOT the correct explanation of A.

[ANS] 1

For detailed Solutions, visit our YouTube channel

<https://www.youtube.com/live/ExqVyzgRBtM?feature=share>

- [Q.77] Which one is an example of heterogenous catalysis ?
- [1] Decomposition of ozone in presence of nitrogen monoxide.
 - [2] Combination between dinitrogen and dihydrogen to form ammonia in the presence of finely divided iron.
 - [3] Oxidation of sulphur dioxide into sulphur trioxide in the presence of oxides of nitrogen.
 - [4] Hydrolysis of sugar catalysed by H^+ ions.

[ANS] 2

- [Q.78] For a certain reaction, the rate = $k[A]^2 [B]$, when the initial concentration of A is tripled keeping concentration of B constant, the initial rate would
- [1] increase by a factor of nine.
 - [2] increase by a factor of three.
 - [3] decrease by a factor of nine.
 - [4] increase by a factor of six.

[ANS] 1

- [Q.79] Select the correct statements from the following :
- A. Atoms of all elements are composed of two fundamental particles :
 - B. The mass of the electron is 9.10939×10^{-31} Kg.
 - C. All the isotopes of a given element show same chemical properties.
 - D. Protons and electrons are collectively known as nucleons.
 - E. Dalton's atomic theory, regarded the atom as an ultimate particle of matter.

Choose the correct answer from the options given below :

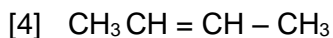
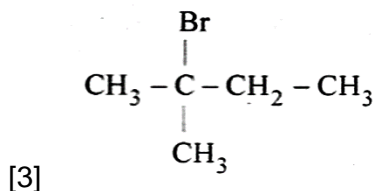
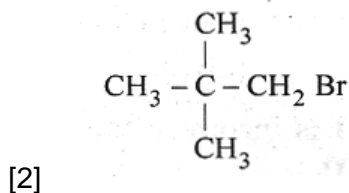
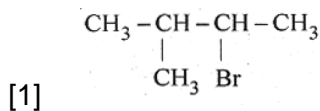
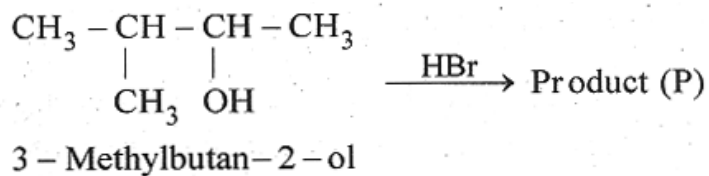
- [1] A and E only
- [2] B, C and E only
- [3] A, B and C only
- [4] C, D and E only

[ANS] 2

For detailed Solutions, visit our YouTube channel

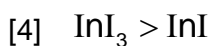
<https://www.youtube.com/live/ExqVyzgRBtM?feature=share>

[Q.80] Consider the following reaction and identify the product (P).



[ANS] 3

[Q.81] Taking stability as the factor, which one of the following represents **correct** relationship?

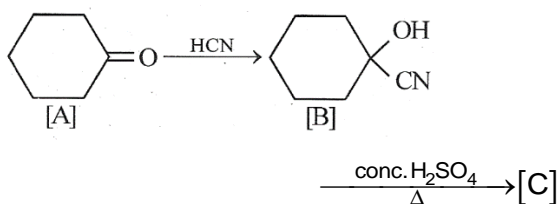


[ANS] 2

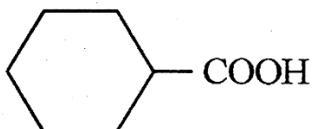
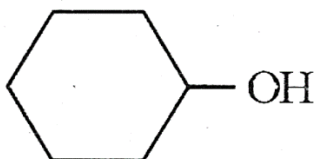
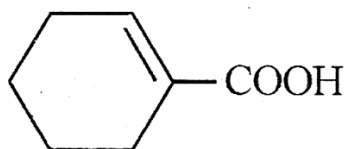
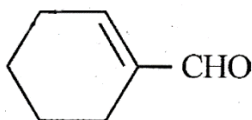
For detailed Solutions, visit our YouTube channel

<https://www.youtube.com/live/ExqVyzgRBtM?feature=share>

[Q.82] Complete the following reaction :



[C] is _____.



[ANS] 2

[Q.83] The conductivity of centimolar solution of KCl at 25°C is $0.0210 \text{ ohm}^{-1} \text{ cm}^{-1}$ and the resistance of the cell containing the solution at 25°C is 60 ohm. The value of cell constant is -

[1] 1.26 cm^{-1}

[2] 3.34 cm^{-1}

[3] 1.34 cm^{-1}

[4] 3.28 cm^{-1}

[ANS] 1

For detailed Solutions, visit our YouTube channel

<https://www.youtube.com/live/ExqVyzgRBtM?feature=share>

[Q.84] The element expected to form largest ion to achieve the nearest noble gas configuration is :

- [1] N
- [2] Na
- [3] O
- [4] F

[ANS] 1

[Q.85] Intermolecular forces are forces of attraction and repulsion between interacting particles that will include:

- A. dipole-dipole forces
- B. dipole-induced dipole forces
- C. hydrogen bonding
- D. covalent bonding
- E. dispersion forces.

Choose the most appropriate answer from the options given below:

- [1] A, B, C, E are correct
- [2] A, C, D, E are correct
- [3] B, C, D, E are correct
- [4] A, B, C, D are correct

[ANS] 1

For detailed Solutions, visit our YouTube channel

<https://www.youtube.com/live/ExqVyzgRBtM?feature=share>

SECTION-B

[Q.86] The reaction that does NOT take place in a blast furnace between 900 K to 1500K temperature range during extraction of iron is:



[ANS] 3

[Q.87] Match List – I with List – II:

List – I (Oxoacids of Sulphur)

List – II (Bonds)

A. Peroxodisulphuric acid

- I. Two S – OH, Four S = O, One S – O – S

B. Sulphuric acid

- II. Two S – OH, One S = O

C. Pyrosulphuric acid

- III. Two S – OH, Four S = O, One S – O – O – S

D. Sulphurous acid

- IV. Two S – OH, Two S = O

Choose the correct answer from the options given below:

[1] A – I, B – III, C – IV, D -II

[2] A – III, B – IV, C – II, D - I

[3] A – I, B – III, C – II, D - IV

[4] A – III, B - IV, C – I, D - II

[ANS] 4

[Q.88] Pumice stone is an example of -

[1] solid sol

[2] foam

[3] sol

[4] gel

[ANS] 1

For detailed Solutions, visit our YouTube channel

<https://www.youtube.com/live/ExqVyzgRBtM?feature=share>

[Q.89] Given below are two statements :

Statement I : The nutrient deficient water bodies lead to eutrophication

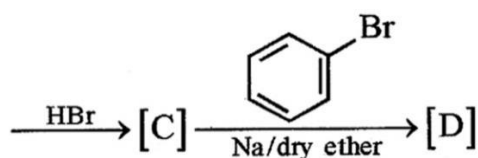
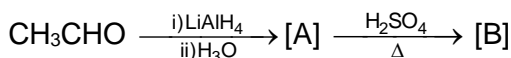
Statement II : Eutrophication leads to decrease in the level of oxygen in the water bodies.

In the light of the above statements, choose the correct answer from the options given below :

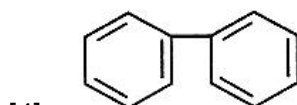
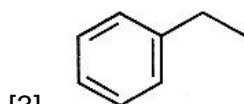
- [1] Statement I is correct but
Statement II is false.
- [2] Statement I is incorrect but
Statement II is true.
- [3] Both Statement I and Statement II are true.
- [4] Both Statement I and Statement II are false.

[ANS] 2

[Q.90] identify the final product [D] obtained in the following sequence of reactions.



- [1] C_4H_{10}
- [2] $\text{HC} \equiv \text{C}^\ominus\text{Na}^+$



[ANS] 3

For detailed Solutions, visit our YouTube channel

<https://www.youtube.com/live/ExqVyzgRBtM?feature=share>

[Q.91] Consider the following compounds / species :



The number of compounds / species which obey Huckel's rule is ____.

[1] 2

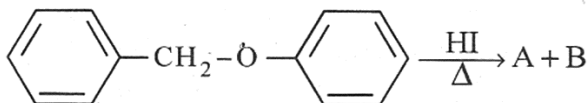
[2] 5

[3] 4

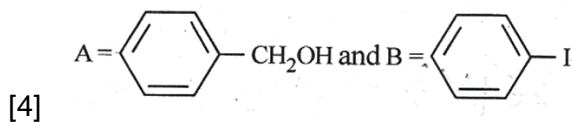
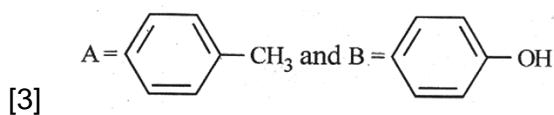
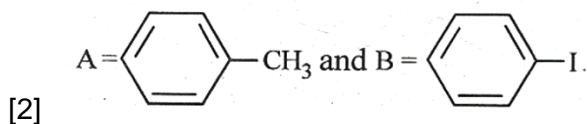
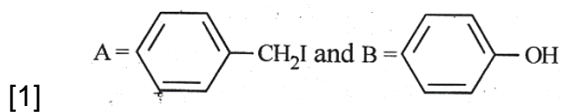
[4] 6

[ANS] 4

[Q.92] Consider the following reaction :



Identify products A and B.

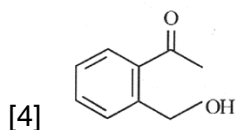
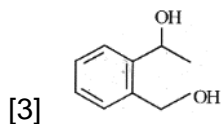
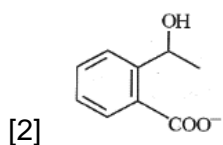
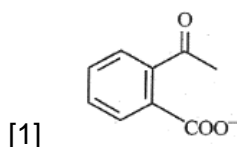
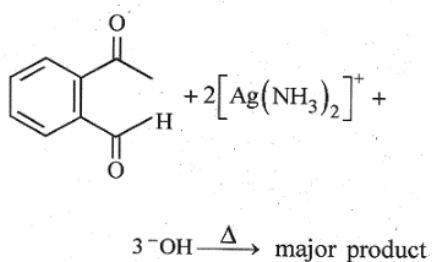


[ANS] 1

For detailed Solutions, visit our YouTube channel

<https://www.youtube.com/live/ExqVyzgRBtM?feature=share>

[Q.93] Identify the major product obtained in the following reaction :



[ANS] 1

[Q.94] Which complex compound is most stable ?

- [1] $[\text{CoCl}_2(\text{en})_2]\text{NO}_3$
 [2] $[\text{Co}(\text{NH}_3)_6]_2(\text{SO}_4)_3$
 [3] $[\text{Co}(\text{NH}_3)_4(\text{H}_2\text{O})\text{Br}](\text{NO}_3)_2$
 [4] $[\text{Co}(\text{NH}_3)_3(\text{NO}_3)_3]$

[ANS] 1

For detailed Solutions, visit our YouTube channel

<https://www.youtube.com/live/ExqVyzgRBtM?feature=share>

[Q.95] The equilibrium concentrations of the species in the reaction $A + B \rightleftharpoons C + D$ are 2, 3, 10 and 6 mol L^{-1} , respectively at 300 K. ΔG° for the reaction is ($R = 2 \text{ cal / mol K}$)

- [1] -1381.80 cal
- [2] -13.73 cal
- [3] 1372.60 cal
- [4] -137.26 cal

[ANS] 1

[Q.96] What fraction of one edge centred octahedral void lies in one unit cell of fcc?

- [1] $\frac{1}{4}$
- [2] $\frac{1}{12}$
- [3] $\frac{1}{2}$
- [4] $\frac{1}{3}$

[ANS] 1

[Q.97] Which amongst the following options is the **correct** relation between change in enthalpy and change in internal energy ?

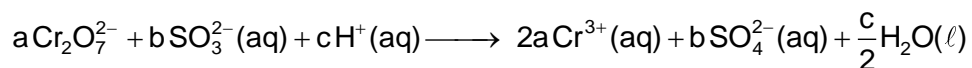
- [1] $\Delta H - \Delta U = -\Delta nRT$
- [2] $\Delta H + \Delta U = \Delta nR$
- [3] $\Delta H = \Delta U - \Delta n_g RT$
- [4] $\Delta H = \Delta U + \Delta n_g RT$

[ANS] 4

For detailed Solutions, visit our YouTube channel

<https://www.youtube.com/live/ExqVyzgRBtM?feature=share>

[Q.98] On balancing the given redox reaction,



The coefficients a, b and c are found to be, respectively -

[1] 1, 8, 3

[2] 8, 1, 3

[3] 1, 3, 8

[4] 3, 8, 1

[ANS] 3

[Q.99] Which of the following statements are **INCORRECT**?

A. All the transition metals except scandium form MO oxides which are ionic.

B. The highest oxidation number corresponding to the group number in transition metal oxides is attained in Sc_2O_3 to Mn_2O_7 .

C. Basic character increases from V_2O_3 to V_2O_4 to V_2O_5

D. V_2O_4 dissolves in acids to give VO_4^{3-} salt

E. CrO is basic but Cr_2O_3 is amphoteric.

Choose the **correct** answer from the options given below:

[1] C and D only

[2] B and C only

[3] A and E only

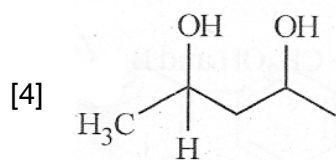
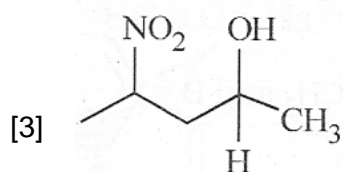
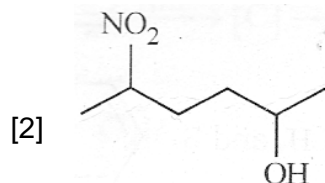
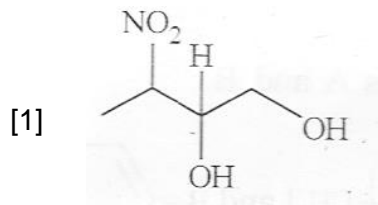
[4] B and D only

[ANS] 1

For detailed Solutions, visit our YouTube channel

<https://www.youtube.com/live/ExqVyzgRBtM?feature=share>

[Q.100] Which amongst the following will be most readily dehydrated under acidic conditions?



[ANS] 2

For detailed Solutions, visit our YouTube channel

<https://www.youtube.com/live/ExqVyzgRBtM?feature=share>